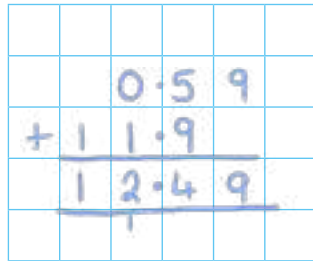


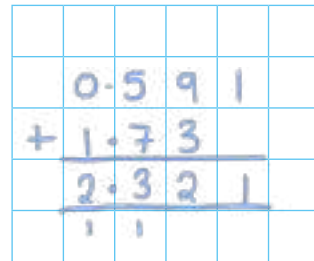


5 Use the column method to work out the additions.


a)  $0.59 + 11.9$




c)  $0.591 + 1.73$



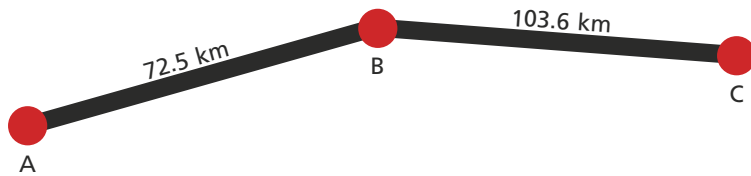
b)  $77.34 + 1.82$



d)  $3.2 + 1.84 + 0.931$



6 Mr Hall drives from point A to point B, then on to point C.



What is the total distance that Mr Hall drives?

$176.1$  km

7 Here are four number cards.

3.8

4.19

0.72

11.46

a) What is the greatest total you can make by adding two of the numbers?

Complete the calculation.

$11.46 + 4.19 = 15.65$

b) What is the sum of the four numbers?

$20.17$

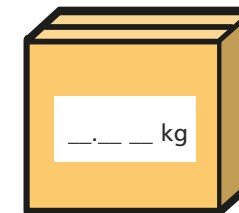
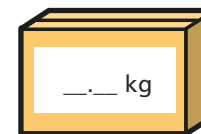
8 Work out the missing digits.

a)  $\underline{2}4.3 + 1\underline{5}.37 = 39.67$

b)  $4.8\underline{5} + \underline{7}.\underline{8} = 12.65$

9 The total mass of the two boxes is 10.85 kg.

What could the mass of each box be? *Various answers.*



How many answers can you find?