

# Maths

This week your focus is doubles.

## Monday

Can you complete the sentences? Use the pictures to help you.



Double 1 is



Double 2 is




Double  is




Double  is

## Tuesday


Can you complete the sentences? Complete the pictures to help you.



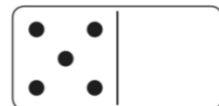
Double 9 is \_\_\_\_\_.



Double 10 is \_\_\_\_\_.



Double 7 is \_\_\_\_\_.



Double 5 is \_\_\_\_\_.

Match the doubles to the number sentences,

Double 3

Double 6

Double 10

Double 7

6 + 6

7 + 7

3 + 3

10 + 10

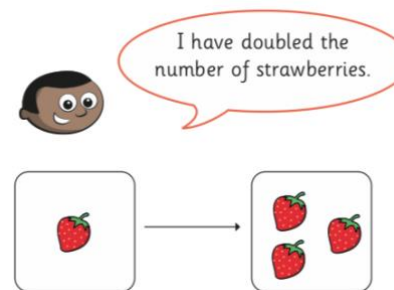
## Wednesday

Complete the table by doubling each number. What patterns do you notice?

1	
2	
3	
4	
5	
6	
7	
8	
9	
10	


## Thursday

What has Mo done wrong? Draw a picture to show what he should've done.



## Friday

Louise doubles her donuts. The picture shows what she had after she doubled her donuts.



Whitney

Louise started with 4 and ended with 8 donuts.

Eva

Louise started with 8 and ended with 16 donuts.

Mo

Louise started with 2 and ended with 4 donuts.

Who do you agree with? Explain why.

