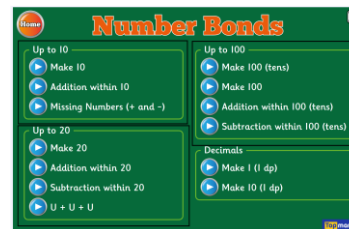


Year 2 Maths

1	2	3	4	5
---	---	---	---	---

Hit the Button - <https://www.topmarks.co.uk/maths-games/hit-the-button> - Select the number bonds button then practise number bonds to 10, 20 and 100. This game will work on a tablet, phone or computer.

For extra number bond practise, use Numbots (same log in as Times Table Rock Stars)



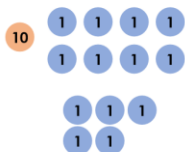
Play on Times Table Rock Stars

Go to the website and log on using your username and password

This week, I have given you some more problems to work through each day – you will need to use your knowledge of how to add and how to subtract

Pat completes a calculation using place value counters.

$$18 + 6 = 23$$



Is he correct? Explain how you know.

- $26 + 7 = 33$
- $6 + 41 = 45$
- $35 + 8 = 44$
- $39 + 6 = 44$
- $9 + 17 = 26$
- $5 + 59 = 54$

True or False? If false, record the correct answers.

Which number sentence does not match the counters in these ten frames?

$$3 + 17 = 20$$

$$17 + 3 = 20$$

$$20 - 3 = 17$$

$$17 - 20 = 3$$



True or false?

$$\text{If } 11 + 6 = 17, \text{ then } 17 + 6 = 11.$$

Write **2 adding** and **2 take away** number sentences using these numbers

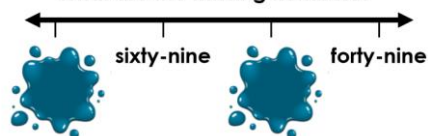
13 6 7

What is 10 less than the number below?



What is 10 more than the number below?
eighty-seven

What are the missing numbers?




Find the missing numbers.

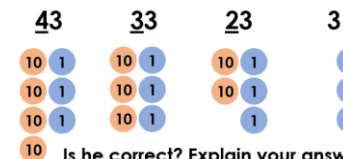
thirty-two	→ 10 more	→	A
B	→ 10 less	→	64
fifty-two	→ 10 less	→	C
83	→ 10 more	→	D



My flower is 38cm tall. If it grows 10cm more, it will be 48cm.



Hugo has created a sequence of numbers.




10 Is he correct? Explain your answer.

Each child has chosen a number. Which number has not been chosen?



My number is 10 less than 43.

My number is 10 more than 14.



Spot the mistake:

